

# Year 3 Maths Activity Mat



## Section 1

Fill in the missing numbers:

$$29 + \square = 100$$

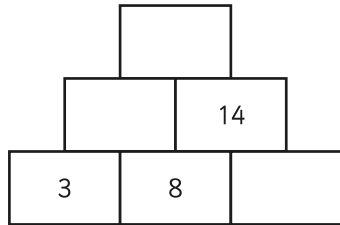
$$73 + \square = 100$$

$$100 - \square = 56$$

$$100 - \square = 9$$

## Section 2

Add each pair of numbers to find the number above:



## Section 3

Complete these calculations:

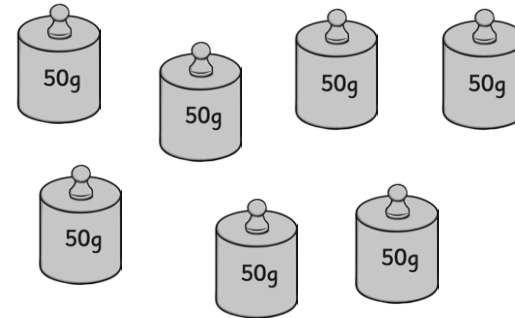
$$50 \times 5 = \square$$

$$6 \times 40 = \square$$

$$30 \times 4 = \square$$

## Section 4

What is the total weight of seven 50g weights?



## Section 5



Complete these calculations:

$$\begin{array}{r} 3 \quad 2 \quad 8 \\ + 2 \quad 4 \quad 2 \\ \hline \end{array}$$

$$\begin{array}{r} 2 \quad 7 \quad 4 \\ - 1 \quad 5 \quad 6 \\ \hline \end{array}$$

## Section 6

What time do these clocks show?



.....

What time will it be in 15 minutes?

.....

## Section 7

**Magic squares**

All the numbers add to the same number, whichever way they are added.

11		22
25	14	
6		17

## Section 8

There are 100 marbles in a jar. 28 are red. 17 are green. How many are not red?

# Year 3 Maths Activity Mat: 6

## Answers

### Section 1

Fill in the missing numbers:

$$29 + \boxed{71} = 100$$

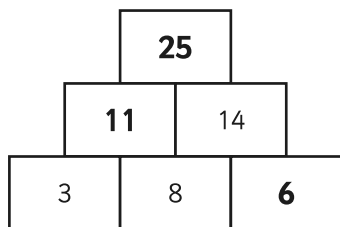
$$73 + \boxed{27} = 100$$

$$100 - \boxed{44} = 56$$

$$100 - \boxed{91} = 9$$

### Section 2

Add each pair of numbers to find the number above:



### Section 3

Complete these calculations:

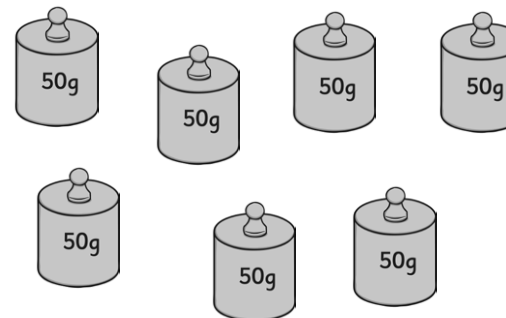
$$50 \times 5 = \boxed{250}$$

$$6 \times 40 = \boxed{240}$$

$$30 \times 4 = \boxed{120}$$

### Section 4

What is the total weight of seven 50g weights?



**350g**

### Section 5


Complete these calculations:

$$\begin{array}{r} 3 \ 2 \ 8 \\ + 2 \ 4 \ 2 \\ \hline 5 \ 7 \ 0 \end{array}$$


$$\begin{array}{r} 2 \ 7 \ 4 \\ - 1 \ 5 \ 6 \\ \hline 1 \ 1 \ 8 \end{array}$$

### Section 6

What time do these clocks show?



**1:22**



**3:07**

What time will it be in 15 minutes?

**1:37**

**3:22**

### Section 7

**Magic squares**

All the numbers add to the same number, whichever way they are added.

11	9	22
25	14	3
6	19	17

### Section 8

There are 100 marbles in a jar. 28 are red. 17 are green. How many are not red?

**72**